

第三、四单元达标测试卷

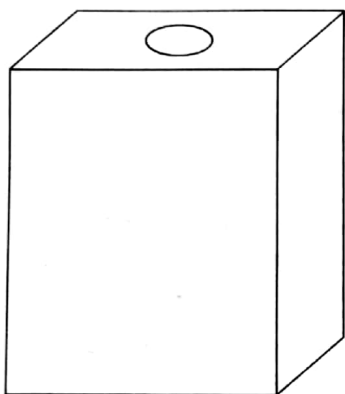


时间：60分钟 满分：100分

题号	一	二	三	四	五	六	总分
得分							

wǒ huì tián

一、我会填。(每空2分,共10分)

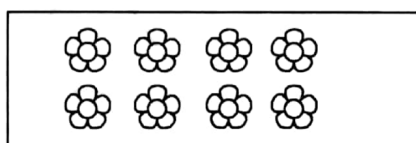
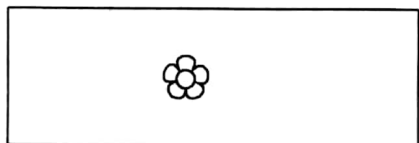
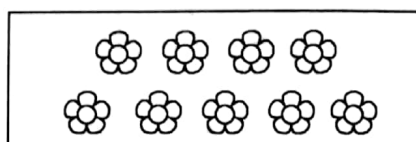
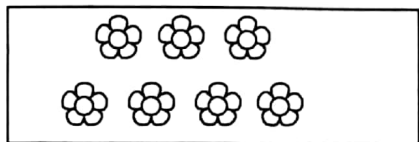
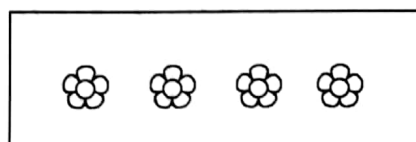
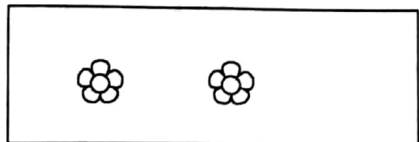
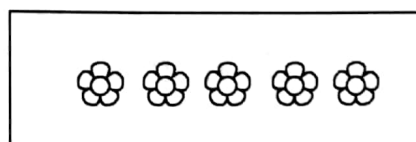
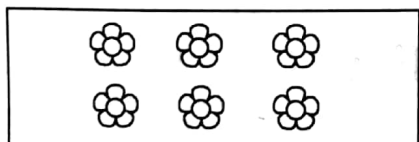
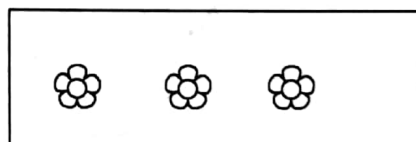
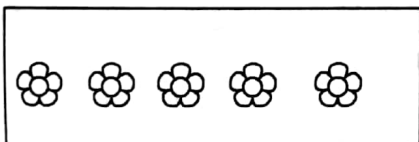


箱子里有黄、白球共9个。

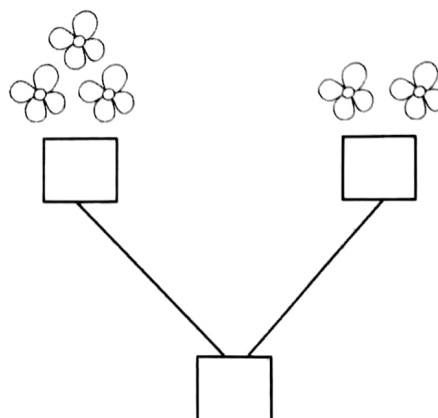
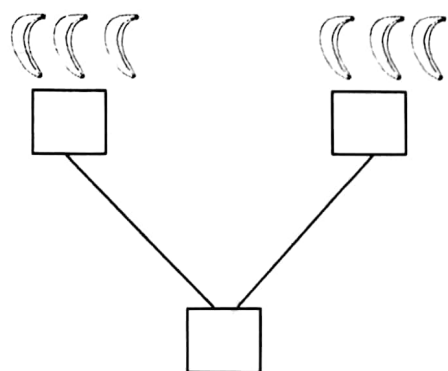
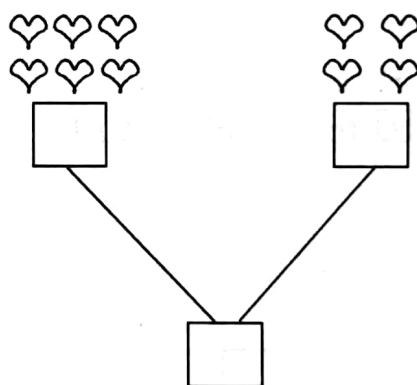
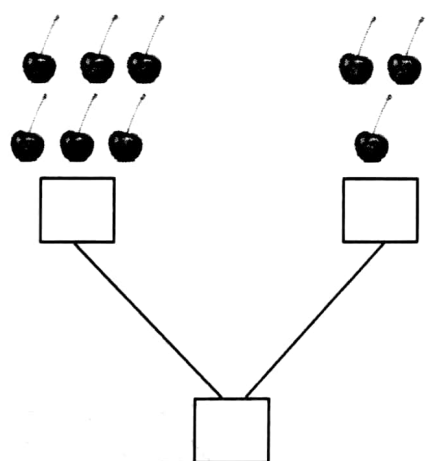
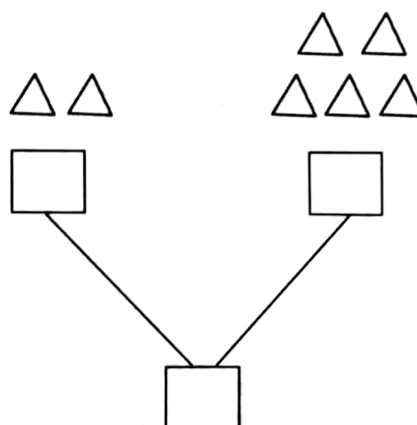
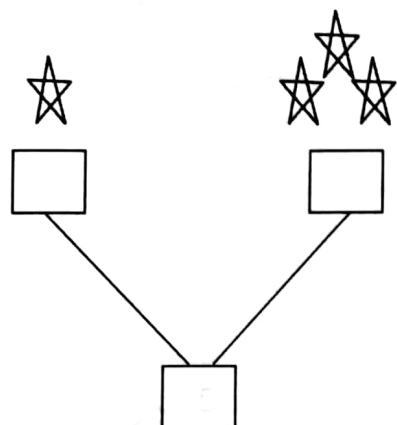
- (1)如果有黄球4个,那么有()个白球。
- (2)如果有白球7个,那么有()个黄球。
- (3)如果有白球3个,那么有()个黄球。
- (4)如果有白球()个,那么有()个黄球。

hǎo péng yǒu shǒu lā shǒu

二、好朋友,手拉手。(共10分)(凑成10)






三、数一数，填一填。（共 36 分）



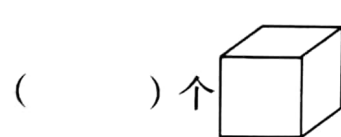
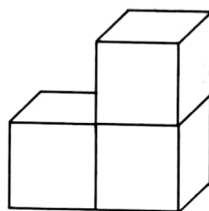
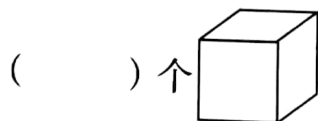
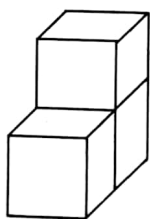
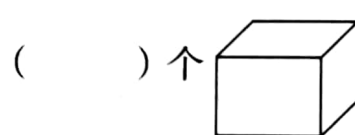
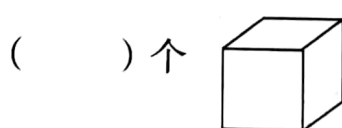
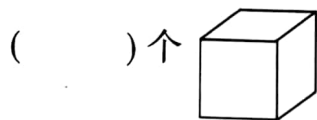
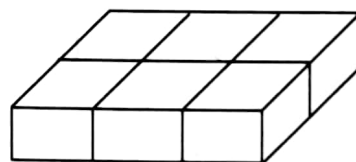
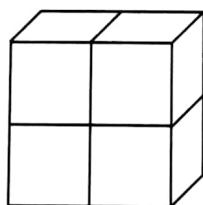
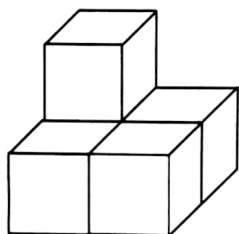
xiǎng yì xiǎng tián yì tián

四、想一想，填一填。(共10分)



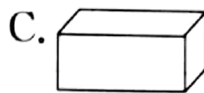
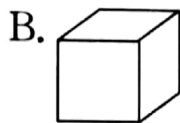
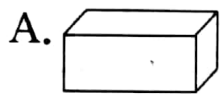
shǔ tú xíng

五、数图形。(共10分)




六、快乐选一选。(每题4分,共24分)

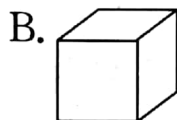
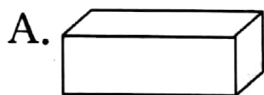
1. 下图中是正方体的是()。



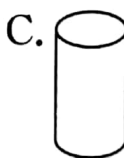
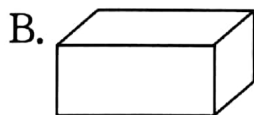
2. 下图中不是圆柱的是()。



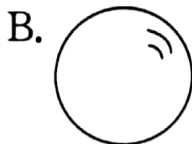
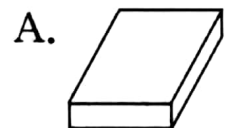
3. 下图中最容易滚动的是()。



4. 下图中()是长方体。



5. 用下面图形搭一搭,要想搭牢固,最底下应放()。



6. 下图中()是圆锥。

